



ALIGARH COLLEGIATE

COACHING CENTRE & CAREER BUILDING INSTITUTE

PRE – BOARD EXAMINATION 2017

According to the Syllabus of Board of Secondary Education, Karachi.

ENGLISH IX

(Science & General Group)

Time: 30 Minutes

Marks: 15

SECTION 'A' COMPULSORY (MULTIPLE CHOICE QUESTIONS)

Q.1 Choose the correct answer for each from the given options.

Note: No overwriting allowed in "MCQ's".

- i) **Select proper degree of Adjective:**
"Iron is the _____ element."
➤ Hard ➤ Harder ➤ Hardest ➤ More hard
- ii) **Choose the correct Structure of sentence:**
"The tax to pay the villagers refused".
➤ Refused to pay the villagers the tax. ➤ The tax the villagers refused to pay.
➤ The villagers refused to pay the tax. ➤ The villagers refused the tax to pay.
- iii) **Who has written the poem "Rain in summer".**
➤ Henry Longfellow ➤ William Wordsworth ➤ Charles Mackay ➤ Mrs. Elsa Kazi
- iv) **Allama Iqbal died in:**
➤ 1938 ➤ 1948 ➤ 1928 ➤ 1958
- v) **Change the Narration:**
"The teacher said to them, "Don't make a noise".
➤ The teacher ordered them donot make a noise.
➤ The teacher ordered them to make a noise.
➤ The teacher forbade them to not make a noise.
➤ The teacher forbade them to make a noise.
- vi) **Nightingale went for training as a nurse in:**
➤ England ➤ Scotland ➤ France ➤ Germany
- vii) **Choose the correct form of Direct Narration:**
I asked my friend if he would come the next day.
➤ I said to my friend, "Will you come tomorrow?" ➤ I said to my friend, "Will be come tomorrow?"
➤ I asked my friend, "Will you come tomorrow?" ➤ I asked my friend, "Will he come tomorrow?"
- viii) **Choose the correct Article:**
Does this house have _____ garden?
➤ a ➤ an ➤ the ➤ None of these
- ix) **Pick out correct Preposition:**
"He has been waiting for us _____ 2,0' clock.
➤ within ➤ for ➤ since ➤ from
- x) **Choose the correct Interrogative sentence:**
"He met me yesterday?"
➤ Did he meet me yesterday? ➤ Did he met me yesterday?
➤ Does he meet me yesterday? ➤ Do he meet me yesterday?
- xi) **Choose the correct Passive voice form:**
"Rinse your hairs".
➤ Let you rinse your hairs. ➤ Let your hairs be rinsed
➤ Let your hairs rinsed. ➤ Let your hairs be rinse.
- xii) **Choose the correct Active form:**
"The car was not being driven by us".
➤ We are not driving the car. ➤ Not Possible.
➤ We was not driving the cars. ➤ We were not driving the car.
- xiii) **Choose the correct Affirmative form:**
"Does he invited them?"
➤ He does not invite them. ➤ He invites them.
➤ He invite them. ➤ He invited them.
- xiv) **Choose the correct meaning of Idioms:**
"To turn over a new leaf"
➤ To begin life again ➤ To make an end
➤ To repeat something ➤ To get escaped
- xv) **Choose the correct Synonym of "Feeble":**
➤ Gentle ➤ Weak ➤ Stern ➤ roof



ALIGARH COLLEGIATE

COACHING CENTRE & CAREER BUILDING INSTITUTE

PRE – BOARD EXAMINATION 2017

According to the Syllabus of Board of Secondary Education, Karachi.

ENGLISH IX

(Science & General Group)

Time: 2.5 Hours

Marks: 60

SECTION 'B' (SHORT - ANSWER QUESTIONS) MARKS: 36

Q.2(a) Answer any EIGHT of the following questions in 2 – 3 sentences each: 24

- i) What were three principles on which Holy Prophet founded on Islamic society? **OR**
What does the Prophet (ﷺ) say about the Holy book of Allah?
- ii) What according to Shah Latif is the aim of life? **OR**
What do you learn about the city of Moen-jo-Daro by looking at the ruins and people?
- iii) When did Helen visit Pakistan and why? **OR**
How did Helen learn to speak and read?
- iv) What do you know about academic achievements of Iqbal? **OR**
How did Quaid praise Iqbal's role in the message on his death?
- v) Why is "Bi-Aman" remembered today? **OR**
What role did Begum Ra'ana Liaquat Ali play in Pakistan movement?
- vi) Why was Quaid called the Ambassador of Hindu Muslim unity? **OR**
What message did Quaid give on 11th August 1947?
- vii) What was Major Aziz Bhatti's reply to his commanding officer? **OR**
What did Holy Prophet (ﷺ) do for sick?
- viii) What are main problems faced by Pakistan and how can they are solved? **OR**
What is an Otaq? When do the Villagers meet there?
- ix) How is malaria caused and how do we get rid of it?
- x) What are the benefits of Guddu Barrage? **OR**
How many canals does the Guddu Barrage have and where?

Q.2(b) Answer any FOUR questions in three or four sentences each: 12

- i) How does poetess compare the Neem Tree to a man? **OR**
What according to the poetess of "Neem Tree" is the highest aim of life?
- ii) What resemblance does the poet find between the stars and daffodils? **OR**
What is the central idea of the poem "The Daffodils"?
- iii) Why according to the poet the rain is welcome in summer? **OR**
Why does the poet compare the sight of rain so beautiful?
- iv) What are harness bells? For what purpose does the horse use it? **OR**
What did King say to the Miller in the last stanza of the poem "The Miller of the Dee"?
- v) What would happen to us if there were no children? **OR**
Write down the central idea of the poem "Children".

SECTION 'C' (DETAILED - ANSWER QUESTIONS) MARKS: 24

- Q.3 Write any essay of about 100 to 120 words on any **ONE** of the following topics: **08**
- Importance of Census
 - Importance of English in Education
 - Prevention is better than cure
 - An unforgettable school function
 - Advantages and disadvantages of Internet
 - My Favourite Leisure Activity
 - PSL 2017

- Q.4 Write an application to the Principal of your school requesting her to arrange a book fair in your school. **06**

OR

Write a letter to your friend congratulating him/her on getting highest marks in board examination.

- Q.5 Translate any **FIVE** of the following sentences into English: **05**

- | | |
|--|---------------------------------------|
| (ii) وہ آدھے گھنٹے سے تصویر بنا رہے ہیں۔ | (i) تمہارے کتنے بھائی ہیں؟ |
| (iv) وہ کراچی میں کیا کر رہا تھا؟ | (iii) وہ امتحان کے بعد لاہور جائے گا۔ |
| (vi) وہ میچ کھیل چکے ہونگے۔ | (v) علی پیدل اسکول جاتا ہے۔ |
| | (vii) وہ کھانا کھا چکا تھا۔ |

- Q.6 Read the following passage and answers the questions given below: **05**

The aeroplane is a wonderful invention. It has a long body with wings on either side. It has a tail and a radar for controlling the directions. When it flies up in the air it look like a great bee. It is a very useful invention. It carries passengers across oceans, mountains and deserts. But it is a source of great danger to mankind in war times. Aeroplanes are being used for bombing over the towns. Thus a very useful machine is providing to be a curse.

- What does an aeroplane look like?
- What is the function of radar?
- Why is an aeroplane called very useful invention?
- Why can it be a curse and great danger to mankind?
- Make a noun of "direct".

OR

Write a note on any **ONE** of the following:

- Quaid-e-Azam
- Nursing
- Village life

05



ALIGARH COLLEGIATE

COACHING CENTRE & CAREER BUILDING INSTITUTE

PRE – BOARD EXAMINATION 2017

According to the Syllabus of Board of Secondary Education, Karachi.

CHEMISTRY (THEORY) Class-IX (Science Group)

Time: 30 Minutes

Marks: 17

SECTION 'A' COMPULSORY (MULTIPLE CHOICE QUESTIONS)

Q.1 Choose the correct answer for each from the given options.

- i) The maximum density of water at 4°C is:
➤ 1.0g/cm³ ➤ 0.998g/cm³ ➤ 0.918g/cm³ ➤ 1.2 g/cm³
- ii) Diamond is used as abrassive because it is:
➤ Soft ➤ Hard
➤ Bad conductor of heat and electricity ➤ None of them
- iii) The solution whose H⁺ (ion) concentration is 1 x 10⁻⁴ its pH is:
➤ 0 ➤ 4 ➤ 1 ➤ 10
- iv) Sublimation is the specific property of:
➤ Solid ➤ Liquid ➤ Gas ➤ All of them
- v) The electronic configuration of Sodium ion (Na⁺) is similar to:
➤ He ➤ Ne ➤ Ar ➤ Kr
- vi) These elements are completely radioactive elements:
➤ Alkali Metals ➤ Halogens ➤ Noble Gas ➤ Actinides
- vii) 10 moles of H₂O is equals to:
➤ 80g ➤ 180g ➤ 180 a.m.u ➤ 80 a.m.u
- viii) The non-crystalline form of Sulphur is:
➤ Rhombic Sulphur ➤ Plastic Sulphur
➤ Monoclinic Sulphur ➤ Ordinary Sulphur
- ix) The air we breathe in usually contains a higher proportion of:
➤ Nitrogen ➤ Oxygen ➤ Argon ➤ Carbondioxide
- x) Nichrome is an alloy contains major percentage of:
➤ Cr ➤ Fe ➤ Ni ➤ Zn
- xi) Which pair of element is chemically similar:
➤ K, Cr ➤ Cu, Ca ➤ F, Cl ➤ N, O
- xii) The first Synthetic organic compound is:
➤ Methane ➤ Ethane ➤ Urea ➤ Ethene
- xiii) The process in which the octane rating of gasoline can be increased:
➤ Cracking ➤ Refining
➤ Reforming ➤ Fractional Distillation
- xiv) The common ingredient used in black and brown shoe polishes is:
➤ Nigrosine Oil ➤ Pearl Ash ➤ Animal charcoal ➤ None of them
- xv) All combustions reaction are examples of:
➤ Endothermic Reaction ➤ Exothermic reaction
➤ Neutralization Reaction ➤ None of them
- xvi) It is monobasic acid:
➤ H₂SO₄ ➤ H₂CO₃ ➤ HCl ➤ H₃PO₄
- xvii) He calculated the circumference of Earth:
➤ Al-Razi ➤ Al-Beruni
➤ Ibn-e-Sina ➤ Jabir Bin Hayyan



ALIGARH COLLEGIATE

COACHING CENTRE & CAREER BUILDING INSTITUTE

PRE – BOARD EXAMINATION 2017

According to the Syllabus of Board of Secondary Education, Karachi.

CHEMISTRY (THEORY) Class-IX (Science Group)

Time: 2.5 Hours

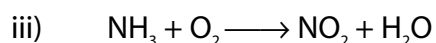
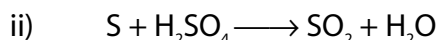
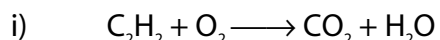
Marks: 68

SECTION 'B' (SHORT ANSWER'S QUESTIONS) MARKS: 42

NOTE: Answer any FOURTEEN questions from this section. All questions carry equal marks.

- Q.2 Define Chemistry and write the names of its four branches. **OR**
What is Scientific Method? Define Observation and Hypothesis.
- Q.3 What is Chemical Reaction? Define and give one example of each of the following:
i) Addition Reaction ii) Combustion Reaction
- Q.4 Chlorine is naturally found in nature in two stable isotopes $_{17}\text{Cl}^{35}$ and $_{17}\text{Cl}^{37}$ in the proportion of 75% and 25% respectively. Calculate its atomic mass.
- Q.5 Name three types of Radioactive rays and write one characteristics of each. **OR**
Write any three characteristics of Cathode Rays.
- Q.6 State and Explain any **ONE** of the following laws:
i) Garaham's Law of Diffusion ii) Law of Multiple Proportion
ii) Law of Reciprocal Proportion iv) Faraday's First Law of Electrolysis
- Q.7 What is Aqua Regia? How does it dissolve gold. **OR**
Write the names of Intermolecular Forces? Define any two of them.
- Q.8 Write three characteristics of Mendeleev's Periodic table. **OR**
What is Enthalpy? Define Exothermic and Endothermic reactions and write one example of each with a balanced chemical reaction.
- Q.9 Define Hardwater. Describe any one of the following method for the removal of hardness in water.
i) Clark's Method ii) By using Zeolite or Permutit
OR
What is saponification of Soap? Name the four types of soap.
- Q.10 Define any **THREE** of the following terms:
i) Ionization Potential ii) Homologous Series iii) Boiling Point
iv) Saturated Solution v) Electrochemical Equivalent
- Q.11 What are Double Salts? Write the name and chemical formulae of any two Double salts. **OR**
What are Hydrocarbons? Define Saturated and Unsaturated hydrocarbons.
- Q.12 Which element contains seven electron in their valence shell? What are they called? Name the radioactive element of this group. **OR**
What is Allotropy? Write the names of crystalline forms of carbon.
- Q.13 Calculate mole fraction of Solute and solvent if a solution contains 2 moles of sugar in 8 moles of water.

Q.14 Balance the following chemical reactions:



Q.15 State the following laws:

i) Dobereiner's Law of Triad

ii) Modern Periodic Law

iii) Newland's Law of Octave

Q.16 State Bronsted Lowry Theory of Acids and Bases and explain it with the help of the examples of HCl and NH_3 .

OR

State Arrhenius Theory of Acids and Bases and explain it with the example of HCl and NaOH.

Q.17 Differentiate between any **ONE** of the following:

i) Ionic Compound and Covalent Compound

ii) Solution and Suspension

iii) Oxidation and Reduction

Q.18 Define Solubility. What are the factors affecting solubility? Describe any one of them.

SECTION 'C' (DESCRIPTIVE ANSWER'S QUESTIONS) MARKS: 26

NOTE: Attempt any TWO questions from this section. All questions carry equal marks.

Q.19(a) Describe Rutherford's experiment which led him to the discovery of nucleus of an atom. **OR**

With the help for labeled diagram and balanced chemical equation, described the laboratory method of the preparation of chlorine.

Q.19(b) Express stepwise Chlorination of Methane giving four chemical equations.

Q.19(c) What are Transition Elements? Write their three general properties.

Q.20(a) Explain giving balanced chemical equations, the Ammonia Solvay Process for the manufacturing of Sodium Carbonate.

Q.20(b) What is Chemical Bond? Define Co-ordinate Covalent Bond. How is Co-ordinate Covalent Bond is formed between NH_3 and H^+ ion? Explain.

Q.20(c) Calculate amount of Silver deposited at cathode when a current of 2.5 Ampere was passed for 2 hours and 20 minutes through a solution of $AgNO_3$. ($Z=0.00118g/C$)

Q.21(a) What is Electroplating. Describe Nickel Plating **OR** Chromium Plating. (Diagram is Necessary). **OR**

With the help of labeled diagram describe the construction and working of Lead Storage Battery **OR** Dry Cell.

Q.21(b) With the help of labeled diagram describe how Sulphur is extracted from underground deposits by Frasch Process. **OR**

Describe the extraction of iron from its Haematite ore in the blast furnace (Diagram is not required). Also write the balanced chemical equation of the reactions which take place in the blast furnace.

Q.21(c) Describe Hasenclever's process for manufacture of Bleaching powder and write two uses of it.

(At. Masses: H = 1, C = 12, O = 16)



ALIGARH COLLEGIATE

COACHING CENTRE & CAREER BUILDING INSTITUTE

PRE – BOARD EXAMINATION 2017

According to the Syllabus of Board of Secondary Education, Karachi.

PAKISTAN STUDIES - IX

Time: 30 Minutes

Marks: 15

SECTION 'A' COMPULSORY (MULTIPLE CHOICE QUESTIONS)

Q.1 Choose the correct answer for each from the given options:

- i) Khilafat-e-Rashida remained for nearly:
➤ 19 years ➤ 39 years ➤ 29 years ➤ 49 years
- ii) Islam presented the concept of welfare state years ago:
➤ 1300 years ➤ 1400 years ➤ 1500 years ➤ 1600 years
- iii) 70% people of Pakistan live in:
➤ cities ➤ villages ➤ districts ➤ valleys
- iv) The best way to develop social relations is to spread:
➤ Justice ➤ Fraternity ➤ Equality ➤ Tolerance
- v) Bangladesh as an independent state was first time accepted by:
➤ India ➤ China ➤ Russia ➤ America
- vi) The source of irrigation in Balochistan is:
➤ Well ➤ Canal ➤ Karez ➤ Lake
- vii) The biggest deposits of chromites in the world are in:
➤ Iran ➤ China ➤ Pakistan ➤ India
- viii) The war of Independence started in the year:
➤ 1850 A.D. ➤ 1857 A.D. ➤ 1880 A.D. ➤ 1890 A.D.
- ix) Pakistan Resolution was seconded by:
➤ Moulvi Fazlul Haque ➤ Khwaja Nazimuddin
➤ Chaudhry Khaliq-uz-Zaman ➤ Chaudhry Rehmat Ali
- x) Sir Syed Ahmad Khan established Muhammeden Anglo-Oriental College in:
➤ Bombay ➤ Behar ➤ Aligarh ➤ Delhi
- xi) The present Governor of Punjab is:
➤ Muhammad Rafiq Rajwana ➤ Shahbaz Sharif
➤ Nawaz Sharif ➤ Muhammad Zubair Omer
- xii) He was the founder of Faraizi Movement:
➤ Shah Waliullah ➤ Sir Syed Ahmed Khan
➤ Haji Shariyat Ullah ➤ Syed Ahmed Shaheed
- xiii) The Plan of the Partition of the Sub-Continent was announced on:
➤ 3rd June 1947 ➤ 15th June 1948 ➤ 20th May 1949 ➤ 25th July 1950
- xiv) Control of Muslim League was taken over by Quaid-e-Azam in:
➤ 1913 ➤ 1940 ➤ 1934 ➤ 1947
- xv) The biggest canal system is in:
➤ Afghanistan ➤ Pakistan ➤ Iran ➤ India



ALIGARH COLLEGIATE

COACHING CENTRE & CAREER BUILDING INSTITUTE

PRE – BOARD EXAMINATION 2017

According to the Syllabus of Board of Secondary Education, Karachi.

PAKISTAN STUDIES – IX (Science & Commerce Group)

Time: 2.5 Hours

Marks: 60

SECTION 'B' (SHORT ANSWER'S QUESTIONS) MARKS: 36

Q.2 Answer any TWELVE questions. All questions carry equal marks.

- i) Write three kinds of Forest in Pakistan. **OR**
Write three sentences on Nuclear Energy.
- ii) Write the objectives of I.T. **OR**
What is the conditions of literacy rate in Pakistan?
- iii) Write three main objectives of Faraizi Movement. **OR**
Write three objectives of All India Muslim League.
- iv) Write three fundamental sources of Islamic Ideology. **OR**
Write three sentences on Ideology of Pakistan.
- v) Write three uses of Natural Gas. **OR**
Write three important Cash Crops / Food Crops of Pakistan.
- vi) Write three services of Shah Waliullah. **OR**
What is meant by Two Nation Theory? Write in three sentences.
- vii) Write three steps taken by Government for Industrial development. **OR**
Write three important Highways of Pakistan.
- viii) Write three Regional Languages of Pakistan. **OR**
Define Culture. Write its three characteristics.
- ix) Write three Religious Festivals of Pakistan. **OR**
Write three festivals of Non-Muslims which they are celebrated in Pakistan.
- x) Write three characteristics of Population of Pakistan. **OR**
Write three sentences on the census held in Pakistan.
- xi) Define a welfare state in three sentences. **OR**
Write the role of individual in a Welfare State.
- xii) Write three sentences on Trade and Commerce in Pakistan. **OR**
Write three uses of E-Commerce.
- xiii) Write three steps taken by Government for Islamization in Pakistan. **OR**
Write the names of three Chief Ministers of Sindh.
- xiv) Write the effects of climate on human life. **OR**
Write three types of Environmental Pollution.
- xv) Write three difficulties faced by Pakistan after its independence. **OR**
Write three sentences on 3rd June Plan.

SECTION 'C' (DESCRIPTIVE ANSWER'S QUESTIONS) MARKS: 24

NOTE: Attempt any TWO questions from this section. All questions carry equal marks.

- Q.3(a) Define democracy. Write any three principles of democracy in Islam. **OR**
Write the views of Allama Iqbal on Ideology of Pakistan.
- (b) Write eight points of Quaid-e-Azam's fourteen points. **OR**
Write the role of Muslim League in the creation of Pakistan.
- Q.4(a) Write a note on Objective Resolution 1949. **OR**
Write the salient features of Constitution of 1973.
- (b) Write the importance of Geographical Location of Pakistan.
- Q.5(a) Write the importance of Urdu as National Language. **OR**
Write four agriculture problems and two remedial measures taken by Government to solve it.
- (b) Write note on any **ONE** of the following:
- | | |
|-----------------------------|--------------------------------------|
| i) Aligarh Movement | ii) Mineral Resources |
| iii) Information Technology | iv) Importance of Forests |
| iv) Pakistan Resolution | vi) Educational Problems of Pakistan |



ALIGARH COLLEGIATE

COACHING CENTRE & CAREER BUILDING INSTITUTE

PRE – BOARD EXAMINATION 2017

According to the Syllabus of Board of Secondary Education, Karachi.

COMPUTER Class-IX (Science Group)

Time: 30 Minutes

Marks: 15

SECTION 'A' COMPULSORY (MULTIPLE CHOICE QUESTIONS)

Q.1 Choose the correct answer for each from the given options:

- i) The CD – writer performance is measured in _____ unit.
➤ BIT ➤ Y ➤ X ➤ DPI
- ii) The number of bits in a byte is:
➤ Four ➤ Two ➤ Sixteen ➤ Eight
- iii) Which one of the following is not a valid rule of Boolean algebra?
➤ $A + O = A$ ➤ $AA = A$
➤ $A + 1 = 1$ ➤ $A + AB = A + B$
- iv) The number system is ideal for the internal working of electronic computer:
➤ Hexadecimal ➤ Binary ➤ Decimal ➤ Octal
- v) * and ? are used in DOS as:
➤ Numeric value ➤ Wildcard Characters
➤ Alpha-Numeric characters ➤ All of these
- vi) Command is used to show the contents of text file:
➤ RUN ➤ TREE ➤ TYPE ➤ CLS
- vii) This option is used in locating files or folders on the bar disk of computer system:
➤ Folder option ➤ Find/Search
➤ Setting ➤ Run
- viii) These are the places that are used to connect various external devices to the computer:
➤ Buses ➤ USB ➤ Port ➤ None of these
- ix) Slide Rule was invented by:
➤ Blaise Pascal ➤ William Oughtred
➤ Leibniz ➤ Charles Babbage
- x) According to distributive law:
➤ $A(B + C) = AB + AC$ ➤ $A(AC) = ABC$
➤ $(A + B) = (B + A)$ ➤ $B + B = B + C$
- xi) Non-volatile memory is:
➤ ROM ➤ Cache Memory
➤ RAM ➤ All of them
- xii) A 4-variable K-Map has:
➤ Four cells ➤ Six cells ➤ Eight cells ➤ Sixteen cells
- xiii) $(456)_{10} = (?)_8$
➤ 710 ➤ 5EB ➤ 3A9 ➤ None of these
- xiv) Which device are used to take data from user and supply it to the computer:
➤ Printer ➤ Scanner ➤ Monitor ➤ None of these
- xv) The bar, displayed at the top of a window, is known as:
➤ Tool bar ➤ Menu bar ➤ Title bar ➤ Task bar



ALIGARH COLLEGIATE

COACHING CENTRE & CAREER BUILDING INSTITUTE

PRE – BOARD EXAMINATION 2017

According to the Syllabus of Board of Secondary Education, Karachi.

COMPUTER Class-IX (Science Group)

Time: 2.5 Hours

Marks: 60

SECTION 'B' (SHORT - ANSWER QUESTIONS) MARKS: 36

Q.2 Answer any NINE questions from this section. All questions carry equal marks.

- i) Define Programming languages and explain its types.
ii) Write the difference between ROM and RAM. **OR**
Write the difference between Hardware and Software.
- iii) What is a Boolean Algebra? Prove any **ONE** given equation and also draw the truth table:
i) $(A + B)(A + C) = A + BC$ ii) $A + \bar{A} \cdot B = A + B$
OR
Define De Morgan's theorem and prove any **ONE** of the following:
i) $\overline{XY} = \bar{X} + \bar{Y}$ ii) $\overline{\bar{X} + \bar{Y}} = XY$
- iv) Define Printer and explain its types. **OR**
Define Language translator and explain its types.
- v) Define Auxiliary Storage and Floppy disk. Explain floppy disk of any one size with label diagram.
- vi) Write full form of the following:
a) EBCDIC b) HDD c) EDVAC d) EPROM e) RMDIR
- vii) Convert the following:
a) $(65)_{10} = (?)_2$ b) $(1001101)_2 = (?)_{10}$
c) $(777)_{10} = (?)_{16}$ d) $(545)_8 = (?)_{10}$
- viii) Solve the following Binary numbers:
a) $101011 + 10011$ b) $1111 - 1000$
c) 11101×100 d) $10011 \div 1000$
- ix) Write any two points of differences between any **FOUR** of the following:
a) DOS and WOS b) Data and Information
c) SIMM and DIMM d) System software and Application software
e) Task bar and Menu bar f) Document and My Document
- x) Define Karnaugh map and use a Karnaugh map for the following expression:
a) $ABC + \bar{A}BC + A\bar{B}C$
b) $\bar{A} + \bar{B}C + \bar{C}D$
- xi) Define virus and write procedure to remove the virus from disk. Also write the name of viruses and available antivirus in the market. **OR**
Define Data and its types.
- xii) What do you mean by Ports? Write types of ports in detail. **OR**
Define term Buses. Write the purpose of each bus.
- xiii) Write short note on any **TWO** of the following:
a) Scanners b) Miniframe c) Plotters
d) Directory e) My Computer f) Functions of Windows Explorer & Start Button
g) Wildcards Character
- OR**
Define any **FOUR** of the following:
a) Operating system b) Boolean Expression c) Complement
d) Recycle bin e) Boolean Variable f) Desktop
g) Analog Computer h) Wallpaper

SECTION 'C' (DETAILED - ANSWER QUESTIONS) MARKS: 24

NOTE: Attempt TWO questions from this section. All questions carry equal marks.

- Q.3 Define Output Devices. Explain Monitor with its types. **OR**
Define Input Devices. Explain Keyboard with its divisions.
- Q.4(a) Draw flow chart diagram of Generation Chart. **OR**
Draw block diagram of Computer setup.
(b) What is Windows Operating System? Write all properties of Windows Operating Systems.
- Q.5(a) Define CPU and explain any **TWO** of the following.
i) Arithmetic Unit and Logic Unit ii) Control Unit iii) Memory Unit
- Q.5(b) What are the characteristics of 1st **OR** 4th generation of computer?



ALIGARH COLLEGIATE

COACHING CENTRE & CAREER BUILDING INSTITUTE

PRE – BOARD EXAMINATION 2017

According to the Syllabus of Board of Secondary Education, Karachi.

BIOLOGY

Class-IX (Science Group)

Time: 30 Minutes

Marks: 15

SECTION 'A' COMPULSORY (MULTIPLE CHOICE QUESTIONS)

Q.1 Choose the correct answer for each from the given options:

- i) Cocci bacteria are of this shape:
➤ Rounded ➤ Rod Shaped ➤ Spiral shaped ➤ Curved
- ii) The sensory layer of eye ball is:
➤ Sclerotic ➤ Choroid ➤ Retina ➤ Cornea
- iii) Glycogen is a molecule that belongs to:
➤ Carbohydrate ➤ Fats
➤ Protein ➤ Vitamin
- iv) Respiratory organ of insects are:
➤ Flame cell ➤ Malpighian Tubules
➤ Trachea ➤ Lungs
- v) Whole of the eye sustaining area of earth:
➤ Biosphere ➤ Atmosphere ➤ Lithosphere ➤ Hydrosphere
- vi) The basic unit of inheritance is:
➤ Chromosome ➤ Gene ➤ Gametes ➤ Nucleus
- vii) The melodious voice of many birds come from:
➤ Syrinx ➤ Larynx ➤ Pharynx ➤ Glottis
- viii) The part of stem which gives rise to leaf is called:
➤ Node ➤ Internode ➤ Petiole ➤ Lamina
- ix) Typhoid is a disease of:
➤ Kidney ➤ Lungs ➤ Liver ➤ Intestine
- x) Nephron are connected with:
➤ Excretory system ➤ Respiratory system
➤ Nervous system ➤ Circulatory system
- xi) Plants which derive their food from dead organic matter are called:
➤ Saprophytes ➤ Symbionts ➤ Parasites ➤ Insectivores
- xii) _____ is an egg laying mammal:
➤ Whale ➤ Duck billed Platypus
➤ Bat ➤ Kangaroo
- xiii) The group of funaria is:
➤ Hepaticae ➤ Musci or Mosses
➤ Horn worts ➤ Pteris (fern)
- xiv) Nostoc belong to:
➤ Cocci Bacteria ➤ Eubacteria ➤ Cyanobacteria ➤ None
- xv) Which of the following is not an algae:
➤ Chlorella ➤ Volvox ➤ Spirogyra ➤ Yeast



ALIGARH COLLEGIATE

COACHING CENTRE & CAREER BUILDING INSTITUTE

PRE – BOARD EXAMINATION 2017

According to the Syllabus of Board of Secondary Education, Karachi.

BIOLOGY

Class-IX (Science Group)

Time: 2.5 Hours

Marks: 70

SECTION 'B' (SHORT ANSWER'S QUESTIONS) MARKS: 42

ZOOLOGY MARKS: 21

NOTE: Answer any SEVEN questions from this section. Each question carries 3 marks.

- Q.2 Describe the theory of Biogenesis and Abiogenesis in brief. **OR**
Write the Translation of any two verses from the Holy Quran about the Origin of life. **OR**
Name three Muslim Biologists and write one contribution of each in the field of Biology.
- Q.3 Draw a neat and labeled diagram of any **ONE** of the following:
i) Vertical section of frog's eye ii) Human Heart
iii) Digestive system of frog iv) Ventral view of the heart of frog
v) Excretory system of male frog vi) Animal cell
vii) Brain of frog
- Q.4 Write down the three differences between any **ONE** of the following:
i) Arteries and Veins ii) Light and Electron Microscope
iii) Prokaryotic and Eukaryotic cell iv) RBC's and WBC's
v) Cold Blooded and warm Blooded Animals
vi) Exoskeleton and Endoskeleton
- Q.5 Write three characteristics of any **ONE** of the following:
i) Phylum Echinodermata ii) Phylum Arthropoda
iii) Phylum Annelida iv) Phylum Porifera
v) Phylum Mollusca
- Q.6 Write down the names of three subgroups of Mammals define them and write the name of eight Placental Mammals. **OR**
How is ATP formed in Cell? Explain.
- Q.7 Define any **THREE** of the following:
i) Fangs/Operculum ii) Palaeontology
iii) Theory iv) Genetics
v) Biotechnology
- Q.8 Write three function of Skeleton in man.
- Q.9 Name three Endocrine glands. Also write one hormone secreted by each gland. **OR**
Describe three types of respiration in frog. **OR**
Write three salient features of the cell theory. **OR**
Define Portal system. Name the two kinds of Portal systems of frog.
- Q.10 State Lamark's Theory of Evolution.
- Q.11 Write three health problems related to nutrition in man. **OR**
Write down any three types of animals Tissue.

BOTANY MARKS: 21

NOTE: Answer any SEVEN questions from this section. Each question carries 3 marks.

- Q.12 Draw a neat and labeled diagram of the following: (any one)
i) Longitudinal section of flower of Brassica
ii) Rod shaped Bacterium
iii) Chlamydomonas
iv) Relation between Cellular Respiration and Photosynthesis

- Q.13 Write **ONE** function of the following:
- | | |
|----------------------------|------------------|
| i) Mitochondria | ii) Golgi Bodies |
| iii) Endoplasmic Reticulum | iv) Ribosomes |
- OR**
- State the following parts of Brassica flower:
- | | | | |
|----------|-------------|-----------------|---------------|
| i) Calyx | ii) Corolla | iii) Androecium | iv) Gynoecium |
|----------|-------------|-----------------|---------------|
- Q.14 Write three points of economic importance of Fungi. **OR**
Write three main points of Darwins theory.
- Q.15 Describe three types of Bacteria according to their shape. **OR**
Write three points on the importance of Bacteria.
- Q.16 Define any **THREE** of the following:
- | | | | |
|-----------------|----------------|-----------------|-------------|
| i) Diffusion | ii) Turgidity | iii) Ascent Sap | iv) Stomata |
| v) Phototropism | vi) Geotropism | | |
- Q.17 Write down the three differences between any **ONE** of the following:
- | | |
|--------------------------------------|------------------------------------|
| i) Dicot and Monocot Plant | ii) Angiosperm and Gymnosperm |
| iii) Sexual and Asexual Reproduction | iv) Photosynthesis and Respiration |
| v) Bryophyte and Tracheophytes | |
- Q.18 Write three advantages of transpiration in Plant. **OR**
Define Photosynthesis. Write chemical equation to express photosynthesis.
- Q.19 Define Pollination and write the name of its two kinds. **OR**
State Mendel's law of Dominance and the law of segregation.
- Q.20 What are Antibiotics? Write the name of any two types of antibiotics. **OR**
Define Tropic movement and explain any one type of tropic movement. **OR**
Describe two conducting tissue of Plants.
- Q.21 Write three points on the importance of Vascular Plant. **OR**
Write any three advantages and disadvantages of vegetative propagation. **OR**
What is Community? Write the name of the components of a Community.

SECTION 'C' (DETAILED ANSWER'S QUESTIONS)

ZOOLOGY MARKS: 14

NOTE: Attempt TWO questions from this section. Each question carries 07 marks.

- Q.22 Draw a neat and labeled diagram of the Human Respiratory System **OR** Arterial System of Frog **OR** Human Digestive System **OR** Human Kidney.
- Q.23 What are the components of Blood? Describe each one of them in detail with diagram. **OR**
Write different types of teeth in man and describe their functions.
- Q.24 Define Endocrine glands. Name three endocrine glands. Also write one hormone secreted by each.

BOTANY MARKS: 14

NOTE: Attempt TWO questions from this section. Each question carries 07 marks.

- Q.25 Describe an experiment to prove that O₂ gas is evolved during Photosynthesis. Draw its labeled diagram also. **OR**
Describe an experiment to prove that CO₂ is necessary for Photosynthesis. Draw a labeled diagram also.
- Q.26 Draw a neat and labeled diagram of the T.S of the Root and Stem of Brassica. **OR**
Define Flora and Fauna. Describe the Flora of Pakistan.
- Q.27 What is meant by Dispersal of seeds and fruits? Describe any two methods of dispersal of seeds and fruits. **OR**
Define Transpiration. Write five factors affecting the rate of transpiration.

علیگرہ کالجیٹ



حیدرآباد کالونی، جیل روڈ، کراچی فون : 34120891 - 34913284

پری بورڈ امتحانات ۲۰۱۷ء بطرز ثانوی تعلیمی بورڈ کراچی

مطالعہ پاکستان برائے جماعت نہم

کل نشانات: ۱۵

وقت: ۳۰ منٹ

حصہ 'الف' (لازمی) کثیر الامتخانی سوالات

سوال ۱: دیئے ہوئے ممکنہ جوابات میں ہر ایک کیلئے درست جواب کا انتخاب کیجئے:

- (i) خلافت راشدہ تقریباً قائم رہی: ☆ ۱۹ سال ☆ ۳۹ سال ☆ ۲۹ سال ☆ ۴۹ سال
- (ii) اسلام نے اسلامی مملکت کا تصور اتنے سال قبل پیش کیا: ☆ ۱۳۰۰ سال ☆ ۱۴۰۰ سال ☆ ۱۵۰۰ سال ☆ ۱۶۰۰ سال
- (iii) پاکستان کے ۷۰ فیصد لوگ یہاں رہتے ہیں: ☆ شہروں میں ☆ دیہاتوں میں ☆ ضلعوں میں ☆ وادیوں میں
- (iv) سماجی ہم آہنگی کو فروغ دینے کا بہترین ذریعہ یہ ہے: ☆ انصاف ☆ بھائی چارہ ☆ مساوات ☆ برداشت
- (v) بنگلہ دیش کو ایک خود مختار ملک کی حیثیت سے سب سے پہلے اس نے تسلیم کیا: ☆ بھارت ☆ چین ☆ روس ☆ امریکہ
- (vi) بلوچستان میں آبپاشی کا ذریعہ یہ ہے: ☆ کنواں ☆ نہر ☆ کاریز ☆ جمیل
- (vii) دنیا میں کرومانٹ کے سب سے بڑے ذخائر یہاں ہیں: ☆ ایران ☆ چین ☆ پاکستان ☆ بھارت
- (viii) جنگ آزادی اس سن عیسوی میں لڑی گئی: ☆ ۱۸۵۰ء ☆ ۱۸۵۷ء ☆ ۱۸۸۰ء ☆ ۱۸۹۰ء
- (ix) قرارداد پاکستان کی تائید سب سے پہلے انہوں نے کی: ☆ مولوی فضل الحق ☆ خواجہ ناظم الدین ☆ چودھری غلیق الزماں ☆ چودھری رحمت علی
- (x) سرسید احمد خان نے محمدان اینگلو اورینٹل کالج یہاں قائم کیا: ☆ ممبئی ☆ بہار ☆ علیگرہ ☆ دہلی
- (xi) صوبہ پنجاب کے گورنر کا نام یہ ہے: ☆ محمد رفیق رجوانہ ☆ شہباز شریف ☆ نواز شریف ☆ زبیر عمر
- (xii) فرانصی تحریک کے بانی یہ تھے: ☆ شاہ ولی اللہ رحمۃ اللہ علیہ ☆ سرسید احمد خان ☆ حاجی شریعت اللہ ☆ سید احمد شہید رحمۃ اللہ علیہ
- (xiii) برصغیر کی تقسیم کے منصوبہ کا اعلان اس تاریخ کو کیا گیا: ☆ ۳ جون ۱۹۴۷ء ☆ ۱۵ جون ۱۹۴۸ء ☆ ۲۰ مئی ۱۹۴۹ء ☆ ۲۵ جولائی ۱۹۵۰ء
- (xiv) قائد اعظم نے مسلم لیگ کی باگ ڈور اس سن میں سنبھالی: ☆ ۱۹۱۳ء ☆ ۱۹۲۰ء ☆ ۱۹۳۲ء ☆ ۱۹۴۷ء
- (xv) دنیا میں سب سے بڑا انہری نظام یہاں پایا جاتا ہے: ☆ افغانستان میں ☆ پاکستان میں ☆ ایران میں ☆ بھارت میں

علیگڑھ کالجیٹ



حیدرآباد کالونی، جیل روڈ، کراچی فون : 34120891 - 4913284

پری بورڈ امتحانات ۲۰۱۷ء بطرز ثانوی تعلیمی بورڈ کراچی

مطالعہ پاکستان برائے جماعت نہم

(سائنس اور کامرس گروپ)

کل نشانات: ۶۰

وقت: ۲.۵ گھنٹے

حصہ 'ب' (مختصر جوابات کے سوالات) نشانات: ۳۶

سوال ۲: اس سوال سے کل بارہ سوالات کے جوابات مطلوب ہیں۔ تمام سوالات کے نشانات مساوی ہیں۔

- | | | | |
|--------|---|----|---|
| (i) | پاکستان میں جنگلات کی تین اقسام تحریر کیجیے۔ | یا | جوہری توانائی پر تین جملے تحریر کیجیے۔ |
| (ii) | اطلاعی فنیت کے مقاصد تحریر کیجیے۔ | یا | پاکستان میں خواندگی کی شرح کس حالت میں ہے؟ |
| (iii) | فرائضی تحریک کے تین نمایاں مقاصد تحریر کیجیے۔ | یا | آل انڈیا مسلم لیگ کے تین مقاصد تحریر کیجیے۔ |
| (iv) | اسلامی نظریے کے کوئی تین ماخذ تحریر کیجیے۔ | یا | نظریہ پاکستان پر تین جملے تحریر کیجیے۔ |
| (v) | قدرتی گیس کے تین استعمالات تحریر کیجیے۔ | یا | پاکستان کی تین اہم نقد آور/غذا آور فصلیں تحریر کیجیے۔ |
| (vi) | شاہ ولی اللہ کی تین خدمات تحریر کیجیے۔ | یا | دوقومی نظریے سے کیا مراد ہے؟ تین جملے میں تحریر کیجیے۔ |
| (vii) | صنعتی ترقی کے لئے تین حکومتی اقدامات تحریر کیجیے۔ | یا | پاکستان کی تین اہم شاہراہیں تحریر کیجیے۔ |
| (viii) | پاکستان کی تین علاقائی زبانیں تحریر کیجیے۔ | یا | ثقافت سے کیا مراد ہے؟ نیز اس کی تین خصوصیات تحریر کیجیے۔ |
| (ix) | پاکستان میں منائے جانے والے تین اسلامی تہوار تحریر کیجیے۔ | یا | پاکستان میں غیر مسلموں کے تین تہوار تحریر کیجیے۔ |
| (x) | پاکستان کی آبادی کی خصوصیات تحریر کیجیے۔ | یا | پاکستان میں ہونے والی مردم شماری پر تین جملے تحریر کیجیے۔ |
| (xi) | فلاحی مملکت سے کیا مراد ہے؟ تین جملے میں تحریر کیجیے۔ | یا | فلاحی مملکت میں فرد کا کردار تحریر کیجیے۔ |
| (xii) | تجارت اور کاروبار پر تین جملے تحریر کیجیے۔ | یا | ای-کامرس کے تین استعمالات تحریر کیجیے۔ |
| (xiii) | اسلام کے فروغ کیلئے حکومت پاکستان کے تین اقدامات تحریر کیجیے۔ | یا | صوبہ سندھ کے تین وزیر اعلیٰ کے نام تحریر کیجیے۔ |
| (xiv) | انسانی زندگی پر آب و ہوا کے اثرات تحریر کیجیے۔ | یا | ماحولیاتی آلودگی کی تین اقسام تحریر کیجیے۔ |
| (xv) | قیام پاکستان کے بعد درپیش آنے والی تین مشکلات تحریر کیجیے۔ | یا | تین جون منصوبے پر تین جملے تحریر کیجیے۔ |

حصہ 'ج' (بیانیہ جوابات کے سوالات) نشانات: ۲۴

نوٹ: اس حصہ سے کسی دو سوالات کے جوابات تحریر کیجیے۔ تمام سوالوں کے نشانات مساوی ہیں۔

- سوال ۳: الف) جمہوریت سے کیا مراد ہے؟ نیز اسلام میں جمہوریت کے کوئی تین مروجہ اصول تحریر کیجیے۔ یا نظریہ پاکستان پر علامہ اقبال کے ارشادات تحریر کیجیے۔
- ب) قائد اعظم کے چودہ نکات میں سے کوئی آٹھ نکات تحریر کیجیے۔ یا تحریک پاکستان میں مسلم لیگ کا کردار تحریر کیجیے۔
- سوال ۴: الف) قراردادِ مقاصد ۱۹۴۹ء پر نوٹ تحریر کیجیے۔ یا ۱۹۷۳ء کے آئین کے نمایاں خدوخال تحریر کیجیے۔
- ب) پاکستان کے جغرافیائی محل وقوع کی اہمیت تحریر کیجیے۔
- سوال ۵: الف) بحیثیت قومی زبان اردو کی اہمیت تحریر کیجیے۔ یا پاکستان کے چار زرعی مسائل اور ان کے حل کے لئے دو حکومتی اقدامات تحریر کیجیے۔
- ب) درج ذیل میں سے کسی ایک پر نوٹ تحریر کیجیے:

- | | | | |
|-------|------------------|------|-------------------------|
| (i) | علیگڑھ تحریک | (ii) | معدنی وسائل |
| (iii) | اطلاعی فنیت | (iv) | جنگلات کی اہمیت |
| (v) | قراردادِ پاکستان | (vi) | پاکستان کے تعلیمی مسائل |

علي ٻڙهه ڪاليجت

حيدرآباد ڪالوني، جيل روڊ، ڪراچي ۳۳۱۲۰۸۹۱ - ۳۳۹۱۳۲۸۳

پري بورڊ امتحانات ۲۰۱۷ء بطرز ثانوي تعليمي بورڊ ڪراچي

سنڌي ڪلاس نائون

مارڪون: ۱۵

وقت: ۳۰ منٽ

حصو الف (گهڻ چونڊائي سوال)

سوال ۱: هيٺ ڏنل هر هڪ سوال لاءِ صحيح جواب چونڊيو:

- (i) اي انسانو! پنهنجي-----جو خيال رکو.
☆ دوستن ☆ نوڪرن ☆ غلامن ☆ ماءُ
- (ii) ڪينجهر ڍنڍ جي وچ ۾ ٽڪري تي سنڌ جي راڻي-----جي قبر آهي.
☆ مومل ☆ مارئي ☆ لورئي ☆ سسئي
- (iii) تالپرن جو دور-----ع کان شروع ٿيو.
☆ ۱۷۸۲ع ☆ ۱۷۸۵ع ☆ ۱۷۹۱ع ☆ ۱۷۹۲ع
- (iv) قلعي ۾ گوڙ ڪونه هو-----لڳي پئي هئي.
☆ رونق ☆ روشني ☆ سانت ☆ اونداهي
- (v) وات تي-----جو ڪليساء هيون.
☆ مسلمانن ☆ هندو ☆ عيسائين ☆ سڪن
- (vi) هڪڙي ڳوٺ ۾ هڪ-----رهندي هئي.
☆ پوڙهي ☆ مائي ☆ بيوه ☆ چوڪري
- (vii) ڪافي جو بادشاه-----کي چيو ويندو آهي.
☆ شاه لطيف ☆ سچل سرمست ☆ طالب الهولي ☆ مصري شاه
- (viii) شاه عبداللطيف ڀٽائي ڪينجهر جو ذڪر سر-----۾ ڪيو آهي.
☆ ڪنڀات ☆ سامونڊي ☆ مارئي ☆ ڪاموڏ
- (ix) پاڻ سڳورن ﷺ عرفات جي ميدان ۾-----تي چڙهي حجه الوداع جو خطبو ڏنائون.
☆ گهوڙي ☆ ڏاچي ☆ هاتي ☆ اُن
- (x) مائي خيرِي جو اصل نالو هو:
☆ زيب النساء ☆ خير النساء ☆ فخر النساء ☆ شمشاد بيگم
- (xi) ملڪن جا پاڻ ۾ تڪرار نبيريندي آهي:
☆ سپريم ڪورٽ ☆ هاءِ ڪورٽ ☆ سيڪورٽي ڪائونسل ☆ عالمي عدالت
- (xii) جهڙو راج تهڙو ڀاڳ، جهڙي راجا، تهڙي:
☆ عوامه ☆ خواص ☆ راڻي ☆ پرڃا
- (xiii) عربن جو حڪومت جي دور ۾ سنڌي زبان ۾ ترجمو ٿيو هو:
☆ توريت جو ☆ انجيل جو ☆ زبور جو ☆ قرآن شريف جو
- (xiv) سنڌ جي جهونن، تاريخي علمي ۽ هنري شهرن مان هڪ آهي:
☆ نصر پور ☆ خير پور ☆ مير پورخاص ☆ مير پور ماٿيلو
- (xv) چوڪري جو هنر پسند آيو:
☆ شهزادي کي ☆ بادشاه کي ☆ وادي کي ☆ ٻانهي کي

علي ڳڙهه ڪاليجت

حيدرآباد ڪالوني، جيل روڊ، ڪراچي ۳۳۱۲۰۸۹۱ - ۳۳۹۱۳۲۸۳

پري بورڊ امتحانات ۲۰۱۷ء بطرز ثانوي تعليمي بورڊ ڪراچي

سنڌي ڪلاس نائون

مارڪون : ۶۰

وقت: ۲ ڪلاڪ ۳۰ منٽ

حسوب (مختصر سوال جا جواب) مارڪون : ۳۶

- سوال ۲: هيٺ ڏنل مان ڪن به اٺن سوالن جا جواب لکو. ۱۶
- (i) رڌپچاءُ ۽ ڪاري پيتي جا ٿانو ڪهڙي ريت صاف ڪرڻ گهرجن؟
 - (ii) نصربور ڪهڙن هنرن جي ڪري مشهور آهي؟
 - (iii) تنظيم چوضروري آهي؟
 - (iv) بادشاهه پيو پيرو ڪهڙو خواب لڏو؟
 - (v) نوري جي قبرڪٿي آهي؟
 - (vi) قوم جي لاءِ شاعر دل مان ڪهڙا سوال ٿا پرن؟
 - (vii) حضرت امامه جعفر صادق ^ع جا ڪهڙا مشهور شاگرد ٿي گذريا آهي؟
 - (viii) سليم ۽ ارشد ڌاڙيلن جو حاتمو ڪيئن آندو؟
 - (ix) مائي خيرِي ڪڏهن وفات ڪئي ۽ سندس مقبرو ڪٿي آهي؟
 - (x) واڍي مائي کي ڪهڙو شرط ٻڌايو؟
 - (xi) ڏيئي ۾ ڪهڙي چڱائي رکيل آهي؟
 - (xii) اجرڪ ڪهڙن شهرن ۾ ٺهي ٿو؟

- سوال ۳: هيٺ ڏنل مان ڪن به چئن لفظن جا معنيٰ لکو ۽ جملا ٺاهيو: ۰۶
- جدوجهد، چهچتو، گهرجائو، ڦيرو، ناماچار، مدي، سوڪڙي، فاسق

- سوال ۴: (الف): هيٺ ڏنل مان ڪن به چئن لفظن جا ضد لکو: ۰۴
- رهبر، سيراندي، پستي، تڪرار، شهر، قديم، جديد، اعليٰ

- (ب): هيٺ ڏنل مان ڪن به ٽن لفظن جا واحد يا جمع لکو: ۰۳
- ڪپڙو، ڪرسي، شيءِ، مک، انب، قومون

- (ج): هيٺ ڏنل مان ڪن به ٽن لفظن جا مزڪر / مئوٺ لکو: ۰۳
- گابو، غريب، زال، ڊاڪٽريائي، پلو، ماسٽر

- (د): هيٺ ڏنل مان ڪن به ٻه جي تعريف مثالن سان لکو: ۰۴
- صفت، ضمير، فعل، حرفِ ندا، حرفِ جر

حصوح (بيانيه سوال جا جواب) مارڪون : ۲۴

سوال ۵: هيٺ ڏنل مان ڪن به هڪ (۱) عنوان تي مضمون لکو: . ۶

- (i) وطن جي حب (ii) منهنجي پسنديده شخصيت
(iii) وقت جي اهميت (iv) ڪراچي شهر

سوال ۶: اسڪول جي هيڊ ماسترنالي هڪ درخواست لکو جنهن ۾ اسڪول ۾ سنڌي

ثقافت جو ڏينهن ملهائڻ جي استدعا ڪريو.

اسڪول جي هيڊ ماسترنالي پڪنڪ جي ويڇڻ جي اجازت لاءِ درخواست لکو. يا

اسڪول جي هيڊ ماسترنالي بيماري ڪارڻ هڪ هفتي جي موڪل لاءِ درخواست

لکو. . ۵

سوال ۷: هيٺ ڏنل شعرن مان ڪن به ٻه (۲) بيتن جي سمجهاڻي شاعر ۽ نظم جي حوالي

سان لکو: . ۵

(i) تنهنجي محنت ملڪ جو مان،

شال جيئن تون هاري جوان.

(ii) اسان کي ڏي خدا توفيق، طاقت، همت ۽ حشمت،

اسان مان ڪئي اڳين جهڙا عجب انسان ڪر پيدا.

(iii) منڙا وطن، تنهنجي مٿان سرماهه سڀ گهوڙي چڏيان

تنهنجو نه مت ڪو ديس پيو، محبوب موچارا وطن

(iv) تنهنجي مٿي ۾ مشڪ ۽ تنهنجي هوائڻ ۾ هڳاءُ،

مهراڻ جي هر موج ۾ امريت سنڌي ڌارا وطن.

يا

هيٺ بند جي سمجهاڻي شاعر ۽ نظم جي حوالي سان ڪريو:

مزدورن ۽ ڪڙمين سان همڪار آهين،

فقيرن جي مجلس جو سينگار آهين،

سڙي تون بين کي ڏئين تو سهاڻي،

رڪيل تو ۾ ڪيڏي نه آهي چڱائي!

سوال ۸:

(الف): هيٺ ڏنل مان ڪن به هڪ سبق جو خلاصو لکو. . ۵

(i) ميرن جي درٻار (ii) اجرڪ

(iii) مولانا دين محمد وفائي (iv) اتحاد، تنظيم ۽ يقين محڪم

(ب): هيٺ پيراگراف جو اردو ۾ ترجمو ڪريو: . ۳

دنيا ۾ شان و شوڪت، دولت ۽ عزت کي جٽاءُ ڪونهي. مرڻ وقت ڪوبه پاڻ سان

اهي ڪٿي ڪونه ويندو. تنهنڪري هر هڪ سرندي واري کي گهرجي ته حياتي

۾ اهو ڪم ڪري جو مرڻ بعد سندس نيڪ نامي ٿئي.